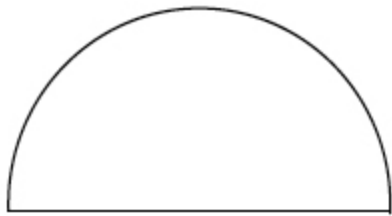


SEMICIRCLE

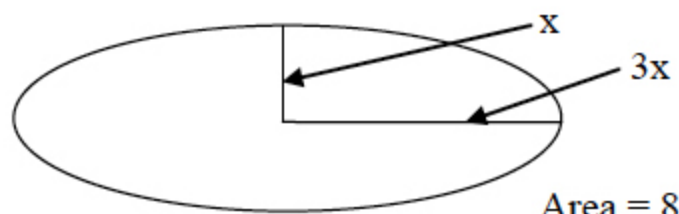


Perimeter = 587

Radius = ?

37= _____

ELLIPSE

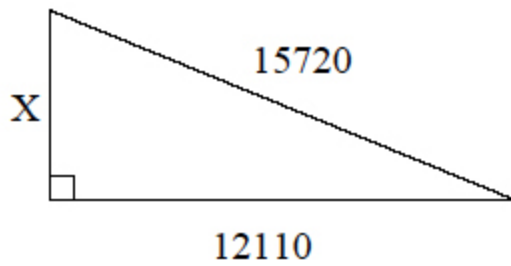


Area = 82.05

$x = ?$

38= _____

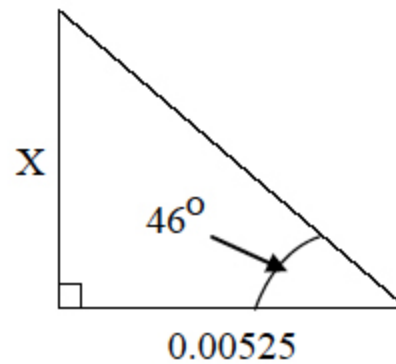
RIGHT TRIANGLE



$X = ?$

49= _____

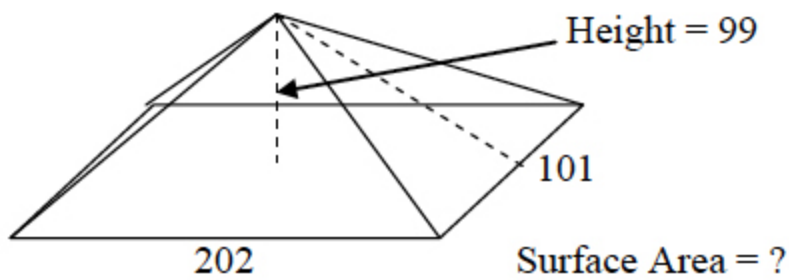
RIGHT TRIANGLE



$X = ?$

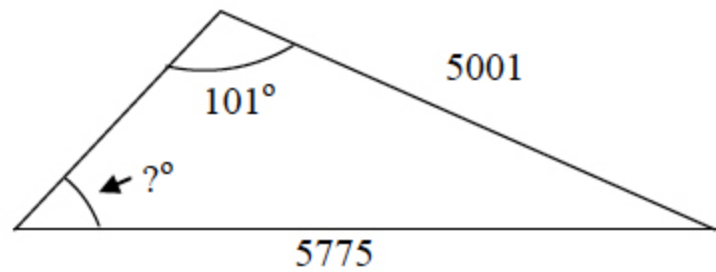
50= _____

RECTANGULAR BASED PYRAMID



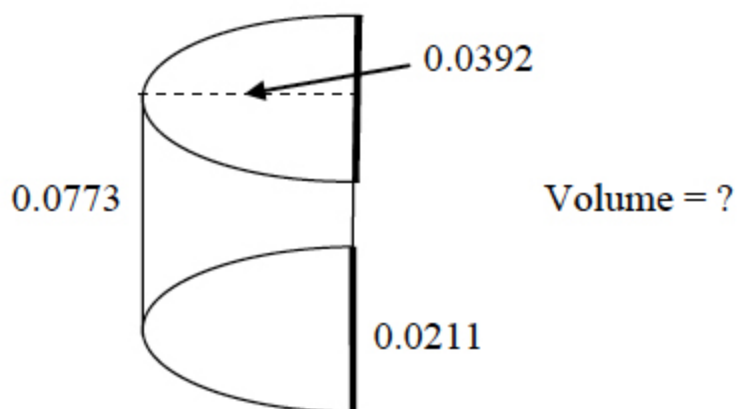
61= _____

SCALENE TRIANGLE



62= _____

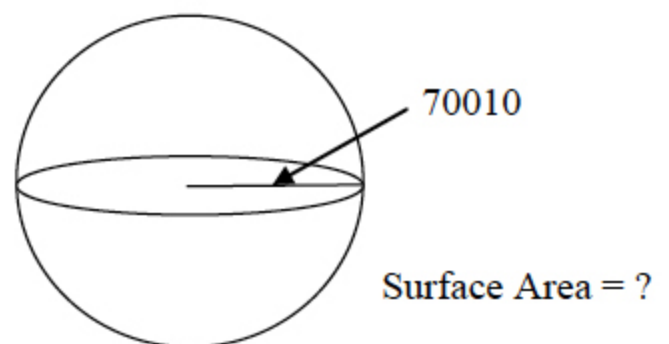
HALF AN ELLIPTICAL SOLID



Volume = ?

73= _____

SPHERE



74= _____

Test 12
Drawing Answers

- 37. 114
- 38. 2.95
- 49. 10000
- 50. .00544
- 61. 57100
- 62. 58.2
- 73. .0000502
- 74. 6.16×10^{10}