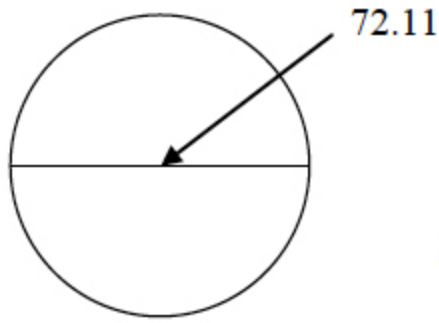


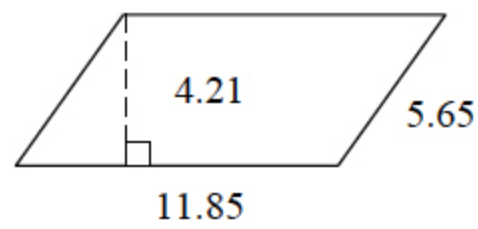
CIRCLE



Area = ?

37= _____

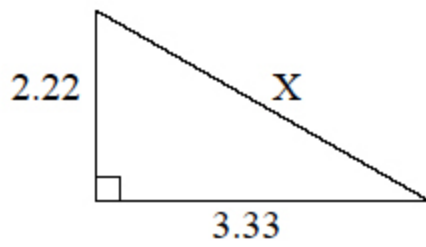
PARALLELOGRAM



Perimeter = ?

38= _____

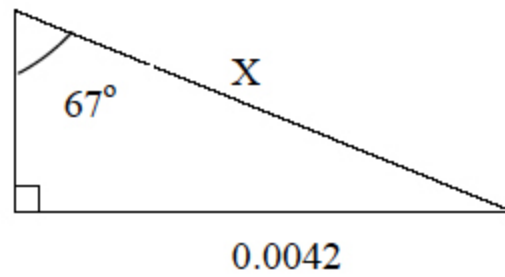
RIGHT TRIANGLE



X = ?

49= _____

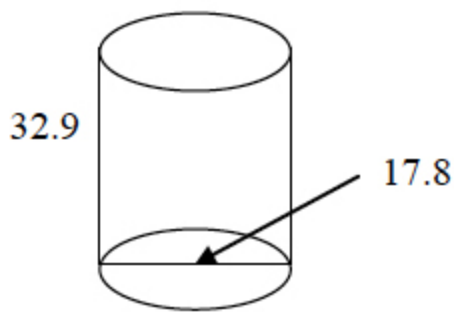
RIGHT TRIANGLE



X = ?

50= _____

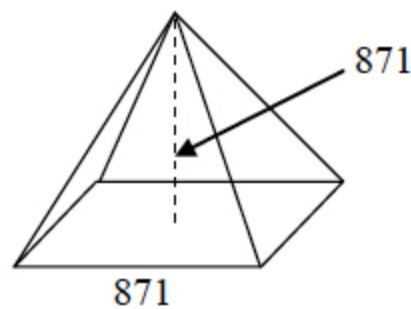
CYLINDER



Surface Area = ?

61= _____

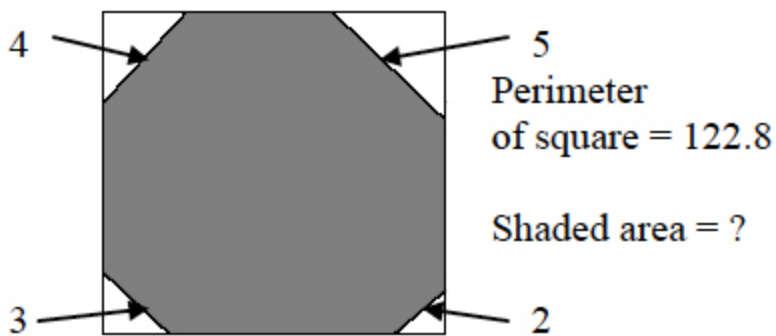
SQUARE BASE PYRAMID



Volume = ?

62= _____

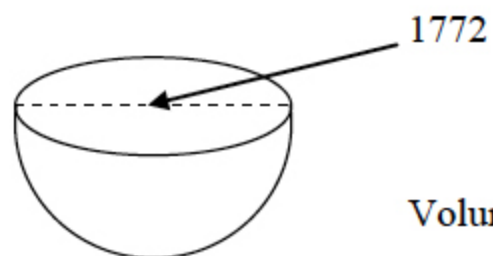
SQUARE AND ISOSCELES TRIANGLES



Shaded area = ?

73= _____

HEMISPHERE



Volume = ?

74= _____

Test 1

Drawing Answers

37. 4080

38. 35.0

49. 4.00

50. .00456

61. 2340

62. 2.20×10^8

73. 929

74. 1.46×10^9