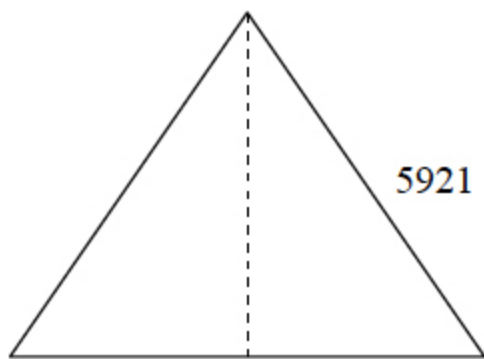


EQUILATERAL TRIANGLE

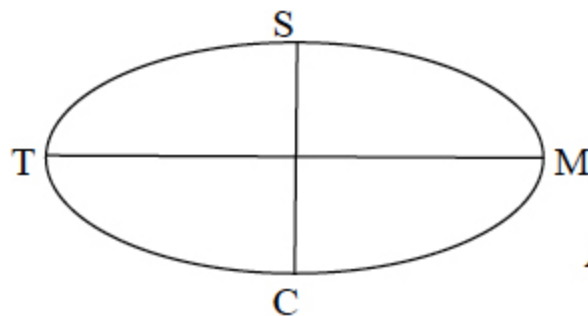


5921

Height = ?

37= _____

ELLIPSE



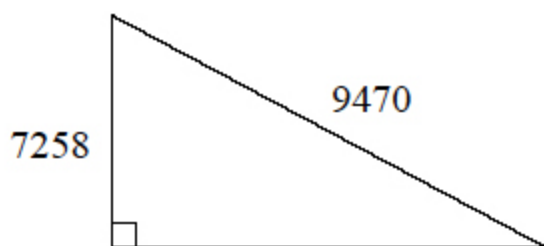
TM = 17.8

Area = 173.35

SC = ?

38= _____

RIGHT TRIANGLE



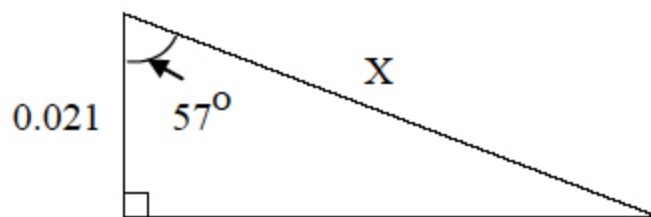
7258

9470

Area = ?

49= _____

RIGHT TRIANGLE



0.021

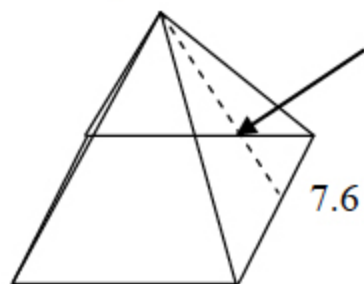
57°

X

X = ?

50= _____

SQUARE BASE PYRAMID



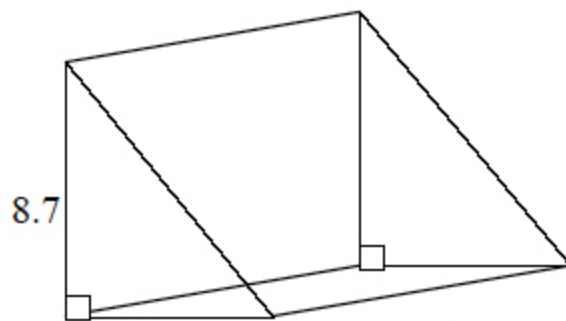
9.8

7.6

Surface Area = ?

61= _____

TRIANGULAR PRISM



8.7

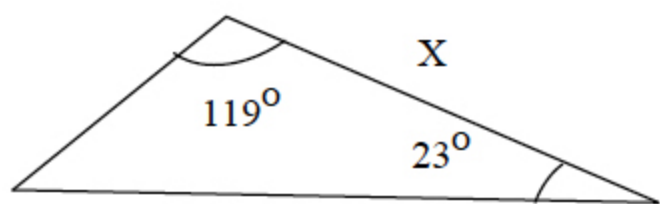
7.7

15.7

Volume = ?

62= _____

SCALENE TRIANGLE



119°

23°

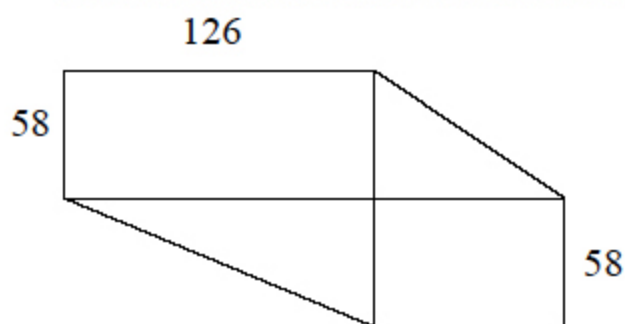
777

X

X = ?

73= _____

RECTANGLE AND RIGHT TRIANGLES



58

58

75

Area = ?

74= _____

Test 7

Drawing Answers

37. 5130

38. 12.4

49. 22100000

50. .0386

61. 207

62. 526

73. 547

74. 17500